




1 Coloca y resuelve.




47




16




5




27




| | | |
|--|--|--|
| | | |
| | | |
| | | |
| | | |
| | | |




| | | |
|--|--|--|
| | | |
| | | |
| | | |
| | | |
| | | |



| | | |
|--|--|--|
| | | |
| | | |
| | | |
| | | |
| | | |




| | | |
|--|--|--|
| | | |
| | | |
| | | |
| | | |



| | | |
|--|--|--|
| | | |
| | | |
| | | |
| | | |

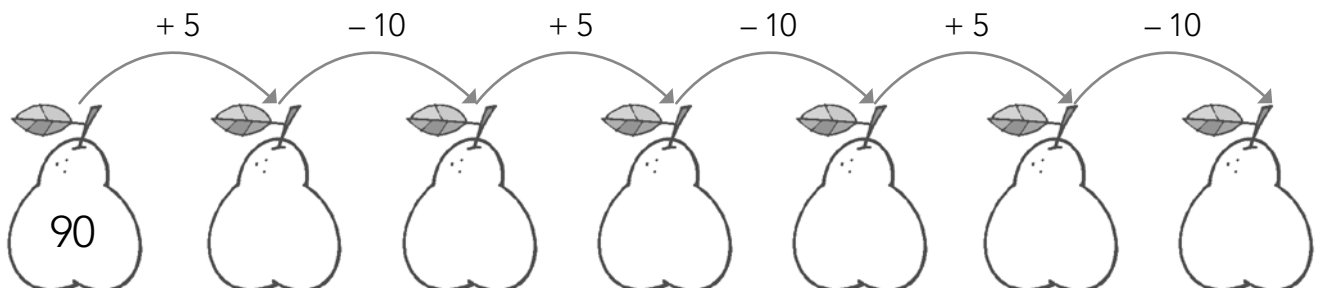


| | | |
|--|--|--|
| | | |
| | | |
| | | |
| | | |

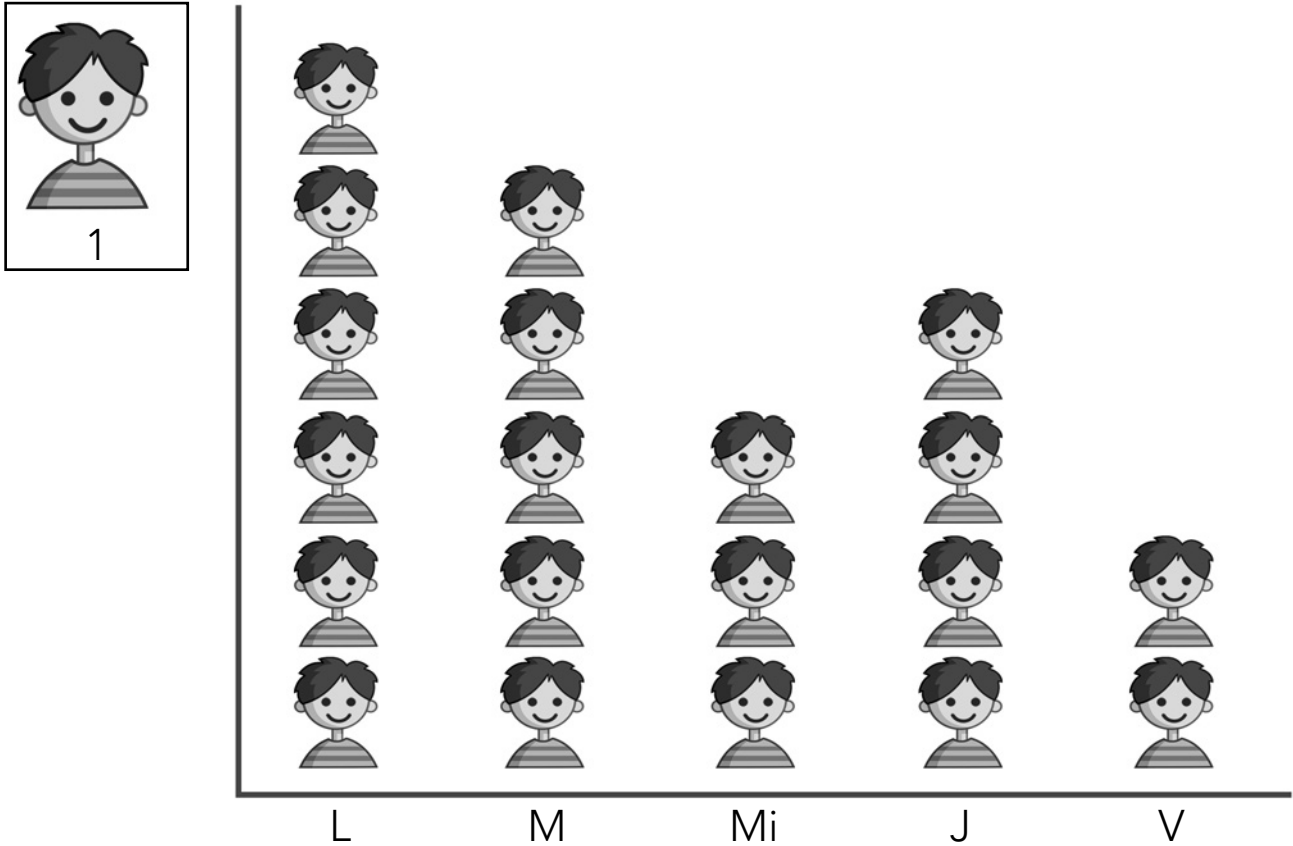


| | | |
|--|--|--|
| | | |
| | | |
| | | |
| | | |

2 Completa la serie.



- 1 Este pictograma muestra los estudiantes que han faltado a clase esta semana.



– ¿Qué día han faltado más estudiantes?

| | | | | | | | | | |
|--|--|--|--|--|--|--|--|--|--|
| | | | | | | | | | |
| | | | | | | | | | |

– ¿Y qué día han faltado menos?

| | | | | | | | | | | | | | | | | | | | | |
|--|--|--|--|--|--|--|--|--|--|--|--|--|--|--|--|--|--|--|--|--|
| | | | | | | | | | | | | | | | | | | | | |
| | | | | | | | | | | | | | | | | | | | | |

– ¿Cuántos estudiantes han faltado el miércoles?

– ¿Y el jueves?

– ¿Cuántos estudiantes han faltado el lunes más que el viernes?